



Adı Soyadı :

Numarası :

Konu: Kesirler (Paydası 10 ve 100 Olan Kesirlerin Birim Kesirlerini Gösterme) Etkinliği

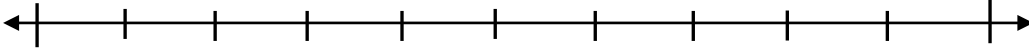
Aşağıda verilen kesirleri model üzerinde göstererek, sayı doğrultusunda belirtiniz.

$$\frac{4}{10}$$



0

1



.....
.....

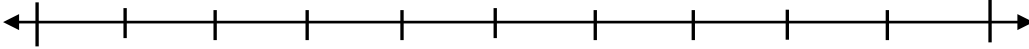
$$\frac{4}{10}$$

kesrinin birim kesrini modelle ve sayı doğrusunda gösteriniz.



0

1



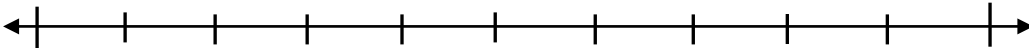
.....
.....

$$\frac{7}{10}$$



0

1



.....
.....

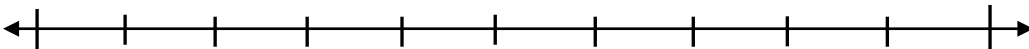
$$\frac{7}{10}$$

kesrinin birim kesrini modelle ve sayı doğrusunda gösteriniz.



0


1




.....
.....

Aşağıda belirtilen kesirleri model üzerinde gösteriniz. Bu kesirlerin birim kesirlerini gösteriniz.

$$\frac{16}{100}$$




Birim
Kesri




....
....

$$\frac{25}{100}$$




Birim
Kesri




....
....

$$\frac{34}{100}$$

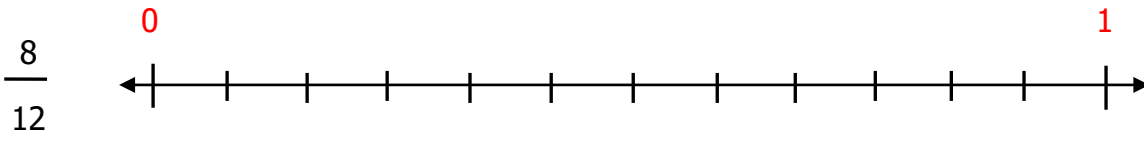
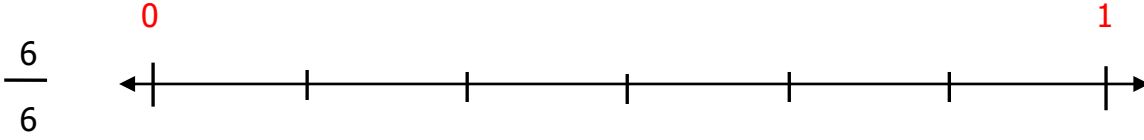
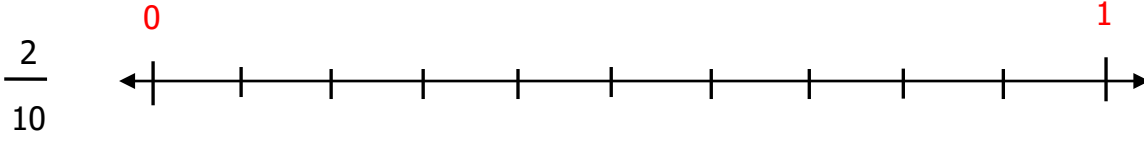
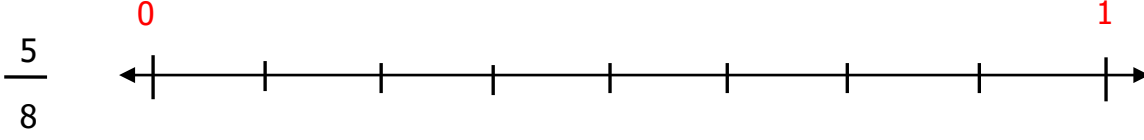
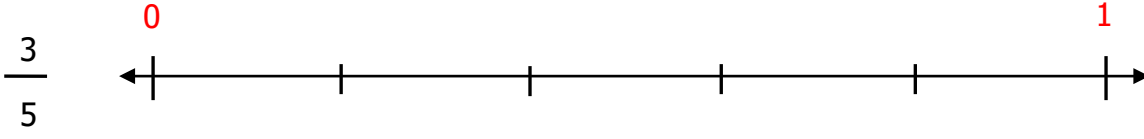


Birim
Kesri



....
....

Aşağıda verilen kesirleri sayı doğrusunda gösterelim.



Sayı doğrusunda belirtilen noktaların ifade ettiği kesri yazalım.

